

# SUBTRACTION WORKSHEET

$$\begin{array}{r} 4 \\ -2 \\ \hline \end{array}$$

$$\begin{array}{r} 5 \\ -1 \\ \hline \end{array}$$

$$\begin{array}{r} 5 \\ -3 \\ \hline \end{array}$$

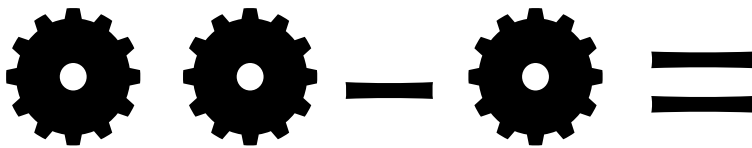
$$\begin{array}{r} 8 \\ -1 \\ \hline \end{array}$$

$$\begin{array}{r} 11 \\ -1 \\ \hline \end{array}$$


$$\begin{array}{r} 8 \\ -8 \\ \hline \end{array}$$

$$\begin{array}{r} 3 \\ -2 \\ \hline \end{array}$$

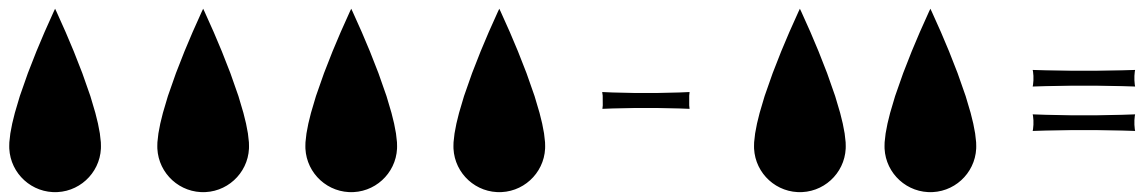
$$\begin{array}{r} 5 \\ -2 \\ \hline \end{array}$$



Two gears minus one gear equals one gear.



Three flowers minus one flower equals two flowers.



Four water droplets minus two water droplets equals two water droplets.